

2020 B
Week 5 (Feb. 9)

11

• Triple Integral

The development of triple integral is parallel to that of double integral. We will be brief.

A rectangular box

$$B = [a, b] \times [c, d] \times [e, f].$$

A partition P is

$$a = x_0 < x_1 < \dots < x_n = b$$

$$c = y_0 < y_1 < \dots < y_m = d$$

$$e = z_0 < z_1 < \dots < z_l = f$$

$$B_{ijk} = [x_{i-1}, x_i] \times [y_{j-1}, y_j] \times [z_{k-1}, z_k]$$

$$|B_{ijk}| = \Delta x_i \Delta y_j \Delta z_k.$$

For a bounded function f in B , its Riemann sum is

$$R(f, P) = \sum_{i,j,k} f(P_{ijk}) |B_{ijk}|, \text{ where}$$

$P_{ijk} \in B_{ijk}$ is a tag point.

f is called integrable if there is a real number I so that whenever $\|P\| \rightarrow 0$,

$$R(f, P) \rightarrow I.$$

Here $\|P\| = \max \{ \Delta x_i, \Delta y_j, \Delta z_k \}$.

$$\text{Notation: } I = \iiint_B f, \quad \iiint_B f dV, \quad \iiint_B f(x, y, z) dV(x, y, z).$$

$\iiint_B f$ is the integral of f over B .

- All continuous functions in B are integrable.
- More generally, all piecewise continuous functions (those which may have a jump across some surfaces or curves or points in B) are integrable.

Fubini's theorem Let f be piecewise continuous in B .

then

$$\iiint_B f = \iint_R \int_e^f f(x,y,z) dz dA(x,y), \text{ where}$$

$$R = [a, b] \times [c, d].$$

- A further reduction gives

$$\iiint_B f = \int_a^b \int_c^d \int_e^f f(x,y,z) dz dy dx.$$

- x, y, z can be exchanged. For instance,

$$\iiint_B f = \iint_{[c,d] \times [e,f]} \int_a^b f(x,y,z) dx dA(y,z).$$

- Triple Integrals over Regions.

A region in space consists of points bounded/enclosed by some surfaces.

We use Ω to denote a region in \mathbb{R}^3 .

Just as in the 2-D case, define the "universal extension"

$$\tilde{f}(x,y,z) = \begin{cases} f(x,y,z), & (x,y,z) \in \Omega, \\ 0, & (x,y,z) \notin \Omega. \end{cases}$$

For f defined in Ω , define

$$\iiint_{\Omega} f \, dV = \iiint_B \tilde{f} \, dV.$$

Using this definition, when Ω can be expressed as

$$\{(x,y,z) = \{ f_1(x,y) \leq z \leq f_2(x,y) \}, (x,y) \in D$$

Fubini's theorem takes the form

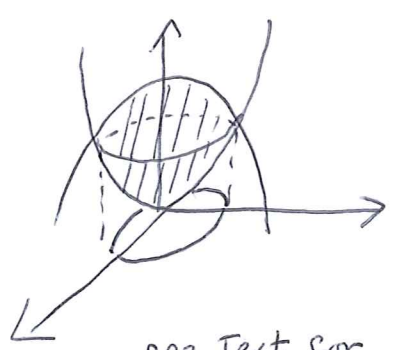
$$\iiint_{\Omega} f \, dV = \iint_D \int_{f_1(x,y)}^{f_2(x,y)} f(x,y,z) \, dz \, dA(x,y). \quad (\star)$$

e.g. Find the volume of Ω enclosed by the surfaces $z = x^2 + 3y^2$ and $z = 8 - x^2 - y^2$.

By sketching the surfaces one can see that Ω is bounded by f_1, f_2 like

$$x^2 + 3y^2 \leq z \leq 8 - x^2 - y^2$$

over some D .



see Text for a better picture.

the boundary of D is those points $(x, y) \in \mathbb{R}^2$ so that (x, y, z) form the intersection of the two surfaces.

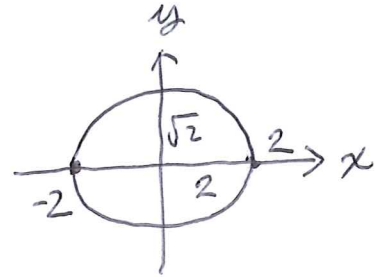
14

Solving

$$\begin{cases} z = x^2 + 3y^2 \\ z = 8 - x^2 - y^2 \end{cases}$$

we get $x^2 + 2y^2 = 4$, i.e., D is

$$\{(x, y) : x^2 + 2y^2 \leq 4\}$$



\therefore Vol of Ω

$$= \iint_D \int_{x^2+3y^2}^{8-x^2-y^2} 1 \, dz \, dA(x, y)$$

$$= \iint_D (8 - x^2 - y^2 - x^2 - 3y^2) \, dA(x, y)$$

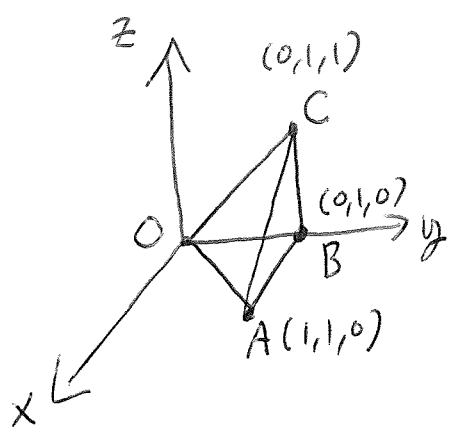
$$= \int_{-2}^2 \int_{-\sqrt{\frac{4-x^2}{2}}}^{\sqrt{\frac{4-x^2}{2}}} (8 - 2x^2 - 4y^2) \, dy \, dx$$

$$= \int_{-2}^2 \left(2(8 - 2x^2) \sqrt{\frac{4-x^2}{2}} - \frac{8}{3} \left(\frac{4-x^2}{2} \right)^{3/2} \right) dx$$

\vdots

$$= 8\pi\sqrt{2}.$$

e.g. Find the volume of the tetrahedron T with vertices $(0, 0, 0)$, $(1, 1, 0)$, $(0, 1, 0)$ and $(0, 1, 1)$.

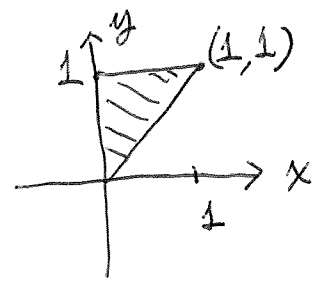


Four faces of T lie on

- ABC on $y=1$
- OAB on $z=0$ (xy-plane)
- OBC on $x=0$ (yz-plane)
- OAC on $x+y+z=0$

T can be expressed as

$$\{(x,y,z) : 0 \leq z \leq y-x, \quad \left. \begin{array}{l} (x,y) \in D \end{array} \right\} \quad \text{where } D \text{ is}$$

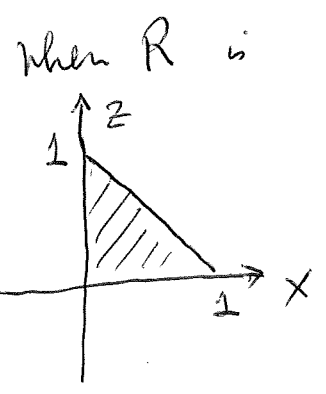


\therefore volume of T :

$$\begin{aligned} \iiint_T 1 dV &= \iint_D \int_0^{y-x} 1 dz dA(x,y) \\ &= \iint_D (y-x) dA(x,y) \\ &= \int_0^1 \int_x^1 (y-x) dy dx \\ &= \frac{1}{6} \end{aligned}$$

Or, T also expressed as

$$\{(x,y,z) : x+z \leq y \leq 1, \quad \left. \begin{array}{l} (x,y) \in R \end{array} \right\}$$

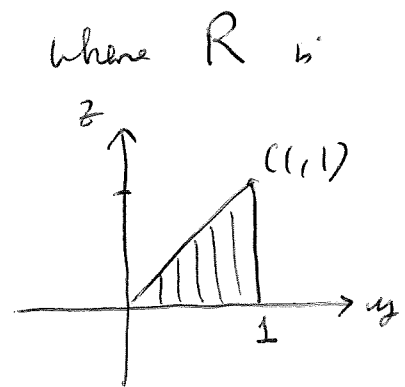


$$\therefore \text{vol. of } T = \iint_R \int_{x+z}^1 1 dy dA(x,z)$$

$$\begin{aligned}
 &= \iint_R (1-x-z) dA(x,z) \\
 &= \int_0^1 \int_0^{1-x} (1-x-z) dz dx \\
 &= 1/6. \text{ the same result.}
 \end{aligned}$$

One may also regard T as

$$\left\{ (x,y,z) : 0 \leq x \leq y-z, \begin{array}{l} (y,z) \in R \end{array} \right\}$$



$$\begin{aligned}
 &\text{Volume of } T \\
 &= \iint_R \int_0^{y-z} 1 dx dA(y,z) \\
 &= \iint_R (y-z) dA(y,z) \\
 &= \int_0^1 \int_0^y (y-z) dz dy \\
 &= \int_0^1 \left(yz - \frac{z^2}{2} \right) \Big|_0^y dy \\
 &= \int_0^1 \frac{1}{2} y^2 dy \\
 &= 1/6, \text{ again \#}
 \end{aligned}$$

• A Digression

How to write down the equation of a plane through 3 given points.

Two cases: the plane passing through $(0,0,0)$
the plane not passing through $(0,0,0)$.

In the first case, the equation is

$$ax + by + cz = 0$$

Use vector notation

$$\vec{n} \cdot \vec{x} = 0, \quad \vec{x} = (x, y, z) \\ = x\hat{i} + y\hat{j} + z\hat{k} \\ \vec{n} = a\hat{i} + b\hat{j} + c\hat{k}.$$

$P = \{(x, y, z) : \vec{n} \cdot \vec{x} = 0\}$, when \vec{n} is a non-zero vector.

When 2 points are given, \vec{u}_1 and \vec{u}_2 , say. Then

$$\vec{n} = \vec{u}_1 \times \vec{u}_2.$$

(since $\vec{a} \times \vec{b}$ is always \perp to \vec{a} and \vec{b} .)

e.g. Find the equation of the plane passing $(0,0,0)$,

$(1, 1, 2)$ and $(0, 0, -5)$.

Take $\vec{u}_1 = (1, 1, 2)$, $\vec{u}_2 = (0, 0, -5)$

$$\vec{u}_1 \times \vec{u}_2 = \begin{vmatrix} \hat{i} & \hat{j} & \hat{k} \\ 1 & 1 & 2 \\ 0 & 0 & -5 \end{vmatrix}$$

$$= -5\hat{i} - (-5)\hat{j} + 0\hat{k}$$

$$= (-5, 5, 0).$$

∴ the equation is

$$-5x + 5y = 0$$

$$\text{or } -x + y = 0.$$

Case 2. the equation is

$$ax + by + cz = d, \quad d \neq 0.$$

$$\text{or } \vec{n} \cdot \vec{x} = d$$

When $\vec{u}_0, \vec{u}_1, \vec{u}_2$ are on the plane.

$$\vec{v}_1 = \vec{u}_1 - \vec{u}_0, \quad \vec{v}_2 = \vec{u}_2 - \vec{u}_0 \text{ satisfy}$$

$$\vec{n} \cdot \vec{v}_1 = \vec{n} \cdot (\vec{u}_1 - \vec{u}_0) = d - d = 0$$

$$\vec{n} \cdot \vec{v}_2 = 0$$

$$\text{So } \vec{n} = \vec{v}_1 \times \vec{v}_2.$$

e.g. Find the equation of the plane passing through $(1, 0, 0), (0, 2, -1), (6, 1, 1)$.

$$\text{Let } \vec{v}_1 = (0, 2, -1) - (1, 0, 0) = (-1, 2, -1)$$

$$\vec{v}_2 = (6, 1, 1) - (1, 0, 0) = (5, 1, 1)$$

$$\vec{n} = \begin{vmatrix} \hat{i} & \hat{j} & \hat{k} \\ -1 & 2 & -1 \\ 5 & 1 & 1 \end{vmatrix} = 3\hat{i} - 4\hat{j} + (-11)\hat{k} \\ = (3, -4, -11)$$

$$\therefore \text{equation is } 3x - 4y - 11z = d$$

Since $(1, 0, 0)$ on the plane,

$$3 \times 1 - 4 \times 0 - 11 \times 0 = d, \quad d = 3$$

$$\therefore \text{it is } 3x - 4y - 11z = 3.$$

- Some theoretical aspects $\left\{ \begin{array}{l} \text{PF of Fubini} \\ \text{volume/area} \\ \text{another version of Fubini} \end{array} \right.$

19

Fubini's thm

$$\iiint_B f dV = \iint_R \int_e^f f(x, y, z) dz dA(x, y)$$

$$B = [a, b] \times [c, d] \times [e, f] \\ = R \times [e, f]$$

Idea of Proof =

$$\iiint_B f dV \approx \sum_{i,j,k} f(x_i^*, y_j^*, z_k^*) \Delta x_i \Delta y_j \Delta z_k \quad (\star)$$

$$= \sum_{i,j} \left(\sum_k f(x_i^*, y_j^*, z_k^*) \Delta z_k \right) \Delta x_i \Delta y_j$$

As $\|P\| \rightarrow 0$, $\sum_k f(x_i^*, y_j^*, z_k^*) \Delta z_k \rightarrow \int_e^f f(x_i^*, y_j^*, z) dz$

Setting $F(x, y) = \int_e^f f(x, y, z) dz$, $\rightarrow F(x_i^*, y_j^*)$

$$\therefore \iiint_B f dV \approx \sum_{i,j} F(x_i^*, y_j^*) \Delta x_i \Delta y_j$$

As $\|P\| \rightarrow 0$

$$\rightarrow \iint_R F(x, y) dA(x, y)$$

$$= \iint_R \int_e^f f(x, y, z) dz dA(x, y)$$

Next, we explain why for $D \subset \mathbb{R}^2$

$$|D| = \iint_D 1 dA$$

is the area of D , and, for $\Omega \subset \mathbb{R}^3$,

$$|\Omega| = \iiint \mathbb{1} dV$$

is the volume of Ω . It suffices to consider D since the case for Ω can be understood in the same way.

Let P be a partition on R .

$\mathcal{A} = \{ \text{those } R_{ij} \text{ contained completely inside } D \}$

$\mathcal{B} = \{ \text{those } R_{ij}, R_{ij} \cap D \neq \emptyset, R_{ij} \cap (R \setminus D) \neq \emptyset \}$


$\mathcal{C} = \{ \text{those } R_{ij} \text{ contained in } R \setminus D \}$

$$R(\tilde{\mathbb{1}}, P) = \sum_{\mathcal{A}} \tilde{\mathbb{1}}(x_i^*, y_j^*) \Delta x_i \Delta y_j + \sum_{\mathcal{B}} \tilde{\mathbb{1}}(x_i^*, y_j^*) \Delta x_i \Delta y_j$$

where $\tilde{\mathbb{1}} = \chi_D(x, y) = \begin{cases} 1, & (x, y) \in D \\ 0, & (x, y) \notin D \end{cases}$

$$R(\tilde{\mathbb{1}}, P) = \sum_{\mathcal{A}} \Delta x_i \Delta y_j + \sum_{\mathcal{B}} \tilde{\mathbb{1}}(x_i^*, y_j^*) \Delta x_i \Delta y_j$$

since $\tilde{\mathbb{1}}(x, y) = 1$ on \mathcal{A} , $\tilde{\mathbb{1}}(x, y) = 0$ on \mathcal{C} . For $R_{ij} \in \mathcal{B}$,



$\Omega \subset R$

When we take $(x_i^*, y_j^*) \in R_{ij} \cap D$, $\tilde{I}(x_i^*, y_j^*) = 1$, so

|||

$$R(\tilde{I}, P) = \sum_{A, B} \Delta x_i \Delta y_j,$$

When we take $(x_i^*, y_j^*) \in R_{ij} \cap R \setminus D$, $\tilde{I}(x_i^*, y_j^*) = 0$, so

$$R(\tilde{I}, P') = \sum_A \Delta x_i \Delta y_j.$$

$R(\tilde{I}, P)$ is the area of the red part

$R(\tilde{I}, P')$ - - - - - "green" part (imaginary!)

clearly,

green part \leq area of $D \leq$ red part

As $\|P\| \rightarrow 0$, both red and green parts

$$\rightarrow \iint_R \tilde{I} dA = \iint_D 1 dA. \quad \#$$

Third, we look at \star again

$$\begin{aligned} \iiint_B f dV &\approx \sum_{i,j,k} f(x_i^*, y_j^*, z_k^*) \Delta x_i \Delta y_j \Delta z_k \\ &= \sum_k \left(\sum_{i,j} f(x_i^*, y_j^*, z_k^*) \Delta x_i \Delta y_j \right) \Delta z_k \end{aligned}$$

(put bracket in a different way)

$$\rightarrow \int_e^f \iint_R f(x,y,z) dA(x,y) dz$$

When f is defined in a region Ω , we have

$$\iiint_{\Omega} f dV = \int_c^f \iint_{\Omega(z)} f(x, y, z) dA(x, y) dz, \text{ where } \Omega(z)$$

is the cross section of Ω at z , ie

$$\Omega(z) = \{ (x, y) : (x, y, z) \in \Omega \}.$$

When $f = 1$, we get the useful volume formula:

$$\text{vol of } \Omega = |\Omega|$$

$$= \iiint_{\Omega} 1 dV$$

$$= \int_c^f |\Omega(z)| dz, \text{ where } |\Omega(z)| \text{ is the}$$

area of the cross section $\Omega(z)$.

"Volume of Ω is the integral of the area of its cross sections."

e.g. Find the volume of the ball of radius R .

For $z \in [0, R]$, the cross section $B(z)$

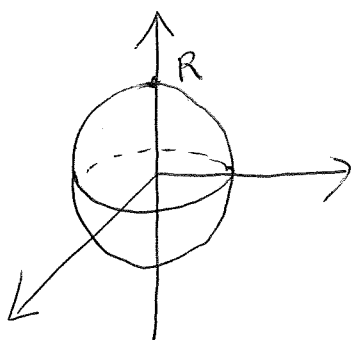
$$= \{ (x, y) : (x, y, z) \in B \}$$

$$= \{ (x, y) : x^2 + y^2 + z^2 \leq R^2 \}$$

$$= \{ (x, y) : x^2 + y^2 \leq (R^2 - z^2) \}$$

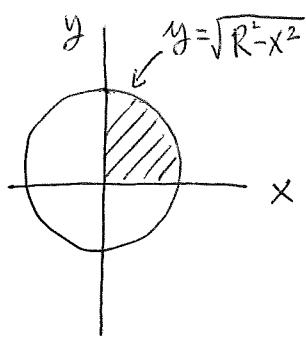
ie, $B(z)$ is a disk of radius $\sqrt{R^2 - z^2}$.

$$|B(z)| = \pi (\sqrt{R^2 - z^2})^2 = \pi (R^2 - z^2).$$



$$\begin{aligned}
 \text{Vol. of ball} &= 2 \int_0^R |B(z)| dz \\
 &= 2 \int_0^R \pi(R^2 - z^2) dz \\
 &= 2\pi \left(R^2 z - \frac{z^3}{3} \right) \Big|_0^R \\
 &= \frac{4\pi}{3} R^3. \#
 \end{aligned}$$

Using old approach we need to evaluate

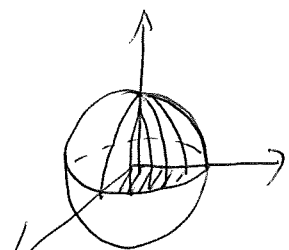


$$\begin{aligned}
 \text{vol. of ball} &= 8 \iint_D \int_0^{\sqrt{R^2 - x^2 - y^2}} dz \, dA(x, y), \text{ where}
 \end{aligned}$$

D is the quarter disk

$$= 8 \int_0^R \int_0^{\sqrt{R^2 - x^2}} \int_0^{\sqrt{R^2 - x^2 - y^2}} dz \, dy \, dx$$

more complicated.

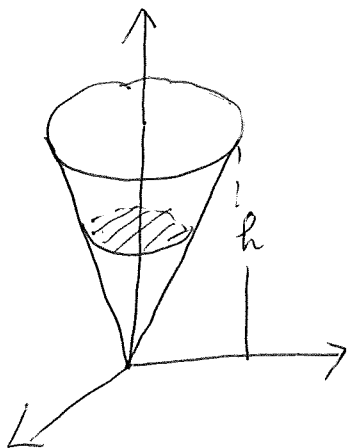


divide into 8 quad parts.

e.g. Find the volume of the circular cone $z = \sqrt{x^2 + y^2}$ of height h .

The cross section $C(z)$ at $z \in [0, h]$

$$\begin{aligned}
 &= \{ (x, y) : (x, y, z) \in C \} \\
 &= \{ (x, y) : \sqrt{x^2 + y^2} \leq z \} \\
 &= \{ (x, y) : x^2 + y^2 \leq z^2 \} \\
 &= \text{disk of radius } z
 \end{aligned}$$



∴ Volume of C

$$= \int_0^h |C(z)| dz$$

$$= \int_0^h \pi z^2 dz$$

$$= \left. \frac{\pi z^3}{3} \right|_0^h$$

$$= \frac{1}{3} \pi h^3. \#$$